
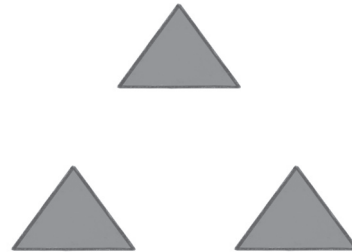


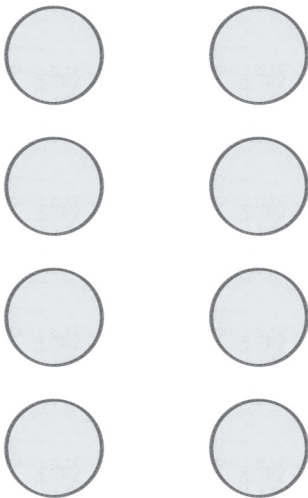
- Count and write.

**1**


\_\_\_\_\_ squares

**2**

\_\_\_\_\_ triangles

**3**

\_\_\_\_\_ circles

**4**

\_\_\_\_\_ rectangles

**Instructions** 1. Count the shapes.  
2. Write the numbers in the blanks.